



1) Complete the table showing the metric measurement units and abbreviations:


Length	millimetre (mm)
	_____ (cm)
	metres (_____)
	_____ (_____)
Mass	_____ (g)
	_____ (_____)
	_____ (t)
Capacity and Volume	_____ (ml)
	_____ (_____)

2) Give the most appropriate unit of measurement:

- height of a door _____
- volume of water in a glass _____
- length of a pencil point _____
- mass of a person _____
- length of a reading book _____
- mass of a rubber _____


3) Tick the best estimation for each question.

a)




- 5kg
- 5 tonnes
- 500g
- 0.05 tonnes

b)



- 2ml
- 2l
- 20l
- 0.2l

c)



- 18m
- 1.8m
- 18mm
- 18 000cm

