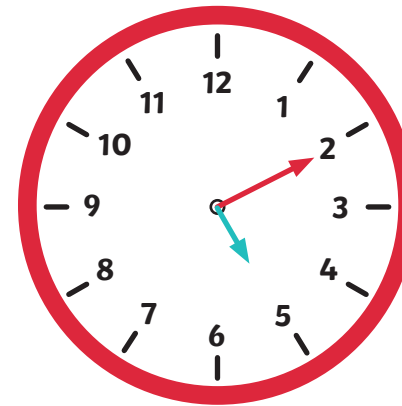


10 minutes
past 1

5 minutes
past 2

20 minutes
past 1

[twinkl.com](https://www.twinkl.com)

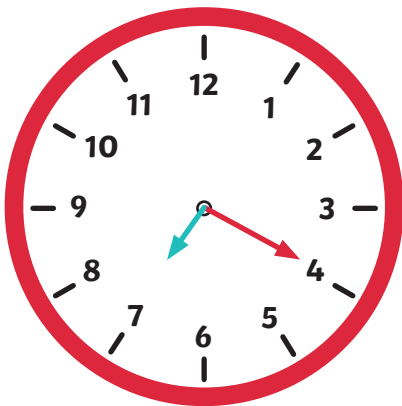


10 minutes
past 5

20 minutes
past 2

10 minutes
to 5

[twinkl.com](https://www.twinkl.com)

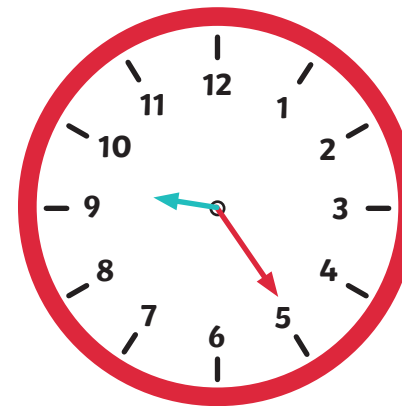


20 minutes
past 7

25 minutes
to 5

5 minutes
past 7

[twinkl.com](https://www.twinkl.com)

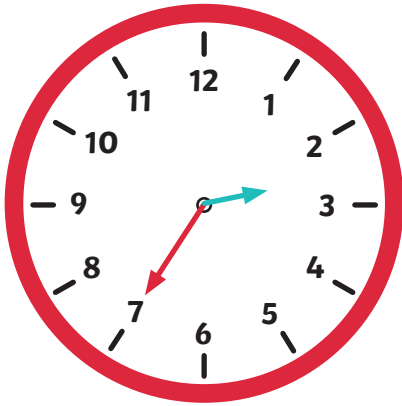


quarter
to
5

25 minutes
to 10

25 minutes
past 9

[twinkl.com](https://www.twinkl.com)

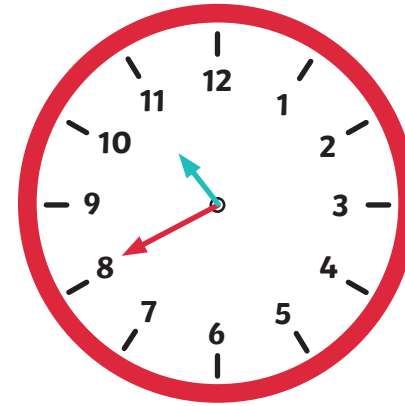


25 minutes
to 3

25 minutes
to 2

quarter
past
7

[twinkl.com](https://www.twinkl.com)



5 minutes
to 8

20 minutes
past 11

20 minutes
to 11

[twinkl.com](https://www.twinkl.com)

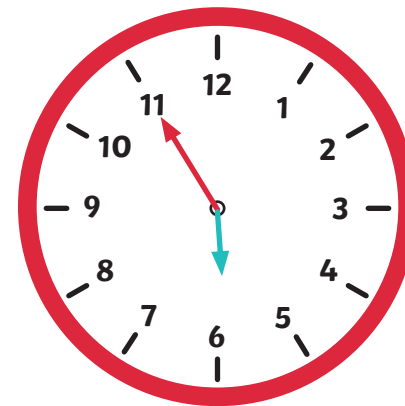


10 minutes
past 12

10 minutes
to 12

10 o'clock

[twinkl.com](https://www.twinkl.com)

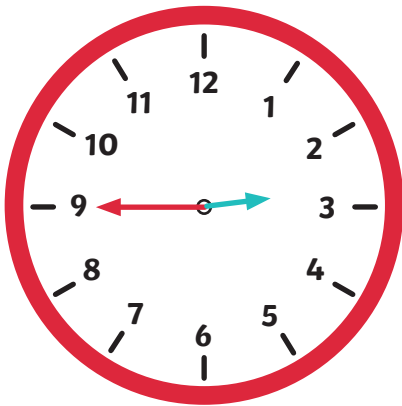


half past 11

25 minutes
past 11

5 minutes
to 6

[twinkl.com](https://www.twinkl.com)




10 minutes
to 3

15 minutes
to 3

quarter
past
4

twinkl.com



20 minutes
to 3

10 minutes
past 12

15 minutes
past 9

twinkl.com

How many
minutes are there
in one hour?

100

12

60

twinkl.com

How many
hours are there
in one day?

12

10

24

twinkl.com